

Do not start attempting the test paper until you are asked to do so.

ENROLLMENT NUMBER:

STUDENT NAME:

Class

1

Maximum Marks : 100

Duration : 40 Minutes

Total Questions : 25

Test Paper Type

**BB**

SmartKid

**GK**

15<sup>th</sup>

GENERAL  
KNOWLEDGE  
OLYMPIAD  
2024-2025

### Instructions for the Candidates

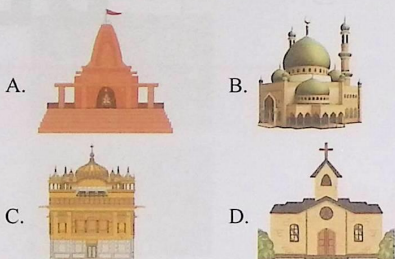
1. Write your 12-digit SKGKO Enrollment Number and your name on top of the Question Paper in the given space.
2. Please  mark your choice of answer in the 'Junior OMR Sheet' Using Pencil or Pen.
3. The Question Paper Booklet comprises 25 questions, divided into two sections.
4. Section-A: General Awareness (20 questions); Section-B: Scholar's Zone (5 questions).
5. For the answers to questions asked under the current affairs category, the validity of facts as of 30th August 2024 will be considered.
6. Each question of Section-A carries 3.5 marks, and that of Section-B carries 6 marks.
7. All the questions are compulsory, and there is no negative marking.
8. Use of a calculator or any other devices in the examination is strictly prohibited.
9. Choose only ONE OPTION as an answer.

1. Mr. Gupta is a doctor. What is his work?

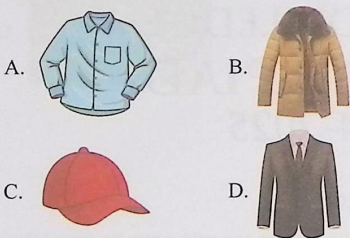


- A. Cooks food                      B. Treats patients  
C. Sells clothes                    D. Teaches students

2. Which one of the following is the place of worship for Sikhs?



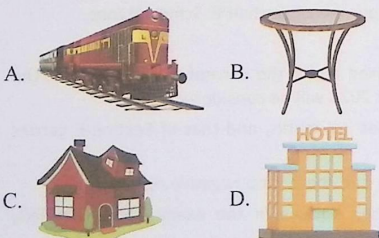
3. Identify the winter dress from the following:




4. Which one of the following cities is not in India?

- A. Mumbai                          B. Colombo  
C. Jaipur                              D. Pune

5. Which one of the following is a mode of transport?




6. Identify the monument shown below.



- A. Taj Mahal                          B. Akshardham Temple  
C. Golden Temple                    D. Lotus Temple

7. Who is the current Prime Minister of India?



8. Name the animal shown below.



- A. Elephant                          B. Tiger  
C. Lion                                  D. Deer

9. 'Sikkim' is the name of a \_\_\_\_\_ in India.

- A. monument                        B. river  
C. state                                  D. city

10. Identify the vegetable shown below.



- A. Tomato                              B. Potato  
C. Capsicum                            D. Onion

11. Identify the sense organ that helps us see.

- A. Nose
- B. Ears
- C. Eyes
- D. Skin

12. The picture of the celebration of the Independence Day is shown below. It is celebrated in the month of \_\_\_\_\_.



- A. January
- B. August
- C. October
- D. November

13. Identify the personality shown below.



- A. Mahatma Gandhi
- B. Sardar Vallabhai Patel
- C. Bhagat Singh
- D. Subhas Chandra Bose

14. National Youth Day is celebrated on 12th January in India. Whose birthday is celebrated as 'National Youth Day'?



- A. Swami Vivekananda



- B. Mahatma Gandhi



- C. B.R. Ambedkar



- D. Dr. Sarvepalli Radhakrishnan

15. Rita is the daughter of Tarun's brother. It means Rita is Tarun's:

- A. Niece
- B. Daughter
- C. Sister
- D. Mother

16. Which one of the following is a mountain range?

- A. Himalayas
- B. Ganga
- C. Sunder bans
- D. Pacific

17. Which one of the following is a bad habit?

- A. Eating healthy food
- B. Waking up early
- C. Littering
- D. Exercising

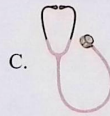
18. Which one of the following is a musical instrument?



A.



B.



C.

D. None of these

19. Name the sport shown below.



- A. Football
- B. Basketball
- C. Hockey
- D. Boxing

20. Find the incorrect match.

- A. Football — Goal
- B. Cricket — Run
- C. Badminton — Wicket
- D. Hockey — Stick

21. Which one of the following monuments is incorrectly matched with its location?
- Hawa Mahal — Jaipur
  - Red Fort — Delhi
  - Gateway of India — Mumbai
  - Charminar — Kolkata
22. Which one of the following festivals is celebrated in December?

A.



B.



C.



D.



23. Find the option that shows the correct order of colours on the Indian national flag from top to bottom.
- Green, White, Saffron
  - Saffron, White, Green
  - White, Green, Saffron
  - Saffron, Green, White

24. Which one of the following is the smallest continent by land area?

- Africa
- Australia
- Europe
- South America

25. When is 'World Health Day' celebrated every year?



- April 7
- May 7
- June 7
- July 7

